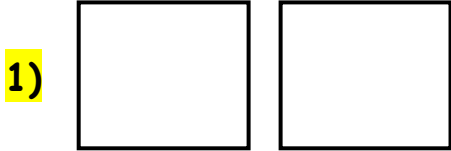
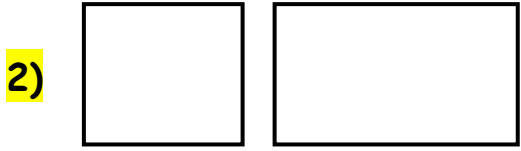


Congruent Shapes WORKSHEET#1

Determine whether the each pair of shapes is congruent or not congruent.




- a) congruent
- b) not congruent




- a) congruent
- b) not congruent



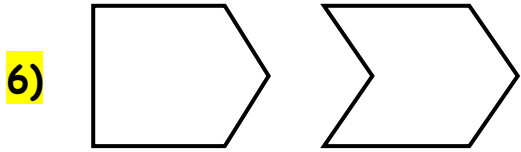
- a) congruent
- b) not congruent




- a) congruent
- b) not congruent



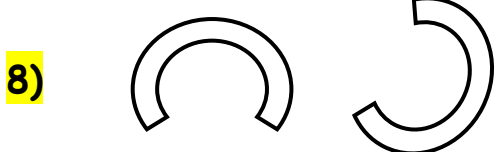
- a) congruent
- b) not congruent



- a) congruent
- b) not congruent



- a) congruent
- b) not congruent



- a) congruent
- b) not congruent



ANSWERS

1) a

2) b

3) b

4) a

5) b

6) b

7) a

8) a