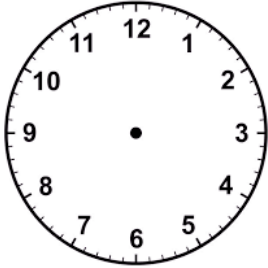


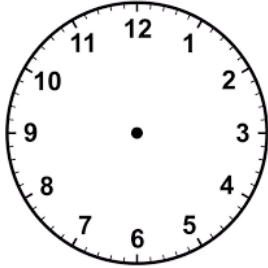
12-hour & 24-hour Clock
WORKSHEET#4

Draw the following 12-hour clock times on the clocks. Also write the time in 24-hour clock below.

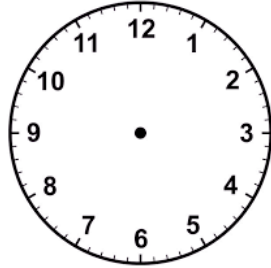
1) **5:00 p.m.**



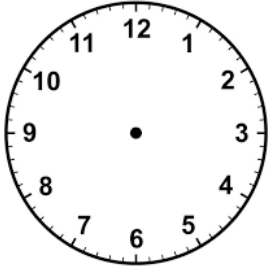
2) **1:20 a.m.**



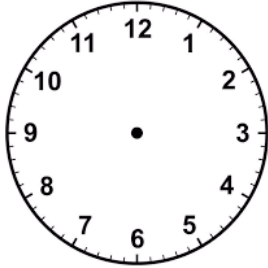
3) **4:50 p.m.**



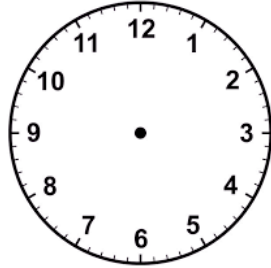
4) **2:30 a.m.**



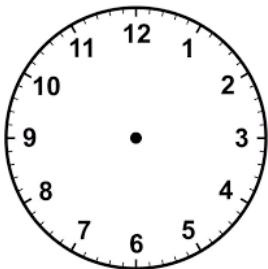
5) **9:45 p.m.**



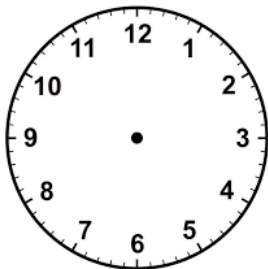
6) **6:25 p.m.**



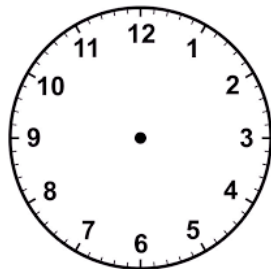
7) **3:00 a.m.**



8) **12:15 p.m.**

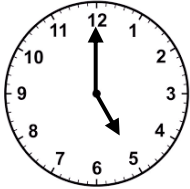


9) **12:00 a.m.**

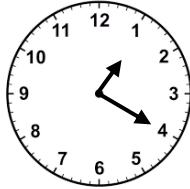


ANSWERS


1) 17:00



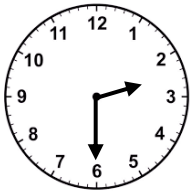
2) 01:20



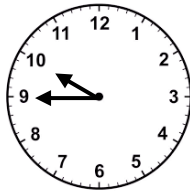
3) 16:50



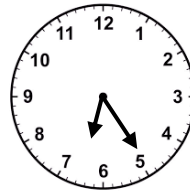
4) 02:30




5) 21:45



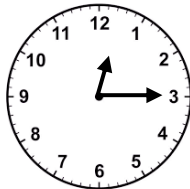
6) 18:25



7) 03:00



8) 12:15



9) 00:00

